



**Q.1 Choose the correct option**

4

- i) \_\_\_\_\_ settlement pattern will be found in the Bastar tribal district of Chhattisgarh  
a) Parallel    b) Square    c) Circular    d) Dispersed
- ii) India is famous for \_\_\_\_\_ in the world.  
a) samba    b) football    c) coffee    d) spices
- iii) Amazon is a large river in the world near its mouth \_\_\_\_\_.  
a) deltaic regions are found                      b) no deltas are found  
c) deposition of sediments occurs              d) fishing is done
- iv) The average temperature in the Amazon valley is \_\_\_\_\_ C°.  
a) 15-18    b) 25-28    c) 28-35    d) 35-38

**Q.2 Match the following.**

4

	Column 'A'		Column 'B'
i)	Central part of Brazil	a)	Minerals
ii)	Minas Gerais	b)	Sheep and Goats
iii)	Savanna Grasslands	c)	Maize
iv)	Eastern part of Brazil	d)	Coffee
		e)	Cow and Goats

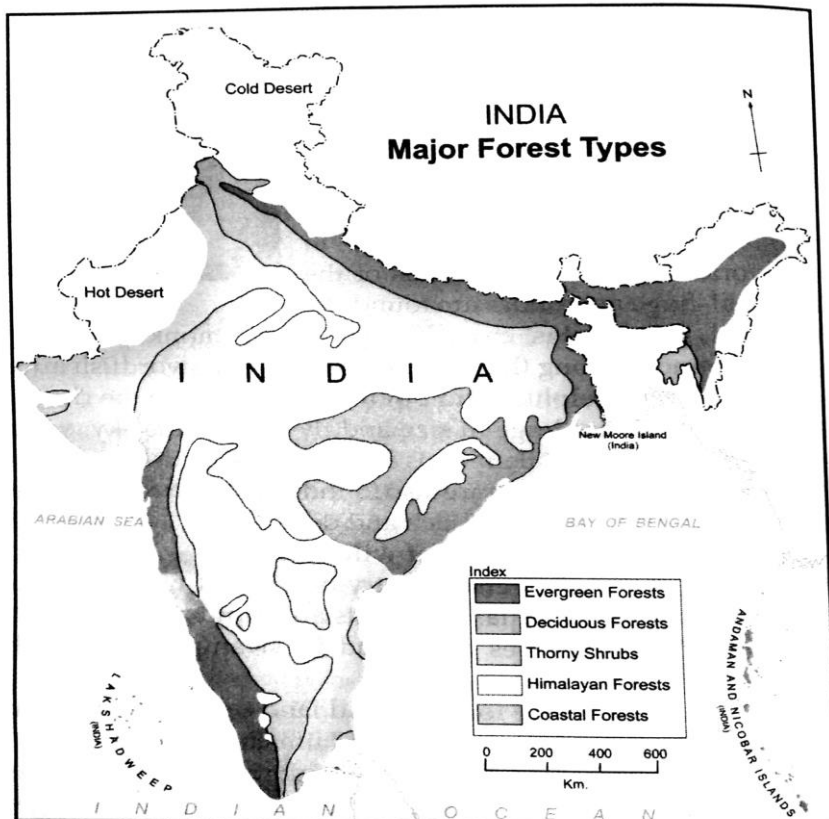
**Q.3 Answer in one sentence.(Any 4)**

4

- i) What is an average age of people in India?
- ii) What are the major food crops of India?
- iii) What attracts foreign tourist to India?
- iv) Where does the highest peak of Brazil lie?
- v) In which direction do the winds blow during the retreating monsoon season?

**Q.4 A] Observe the map and answer the following question.**

4



- i) Which forests are found in western snow-capped regions?

- ii) On which coast do you mainly find the coastal vegetation?
- iii) Which type of forests occupies maximum area in India? Why?
- iv) Where do you thorny and shrub vegetation found and Why?

**B] Complete the table.**

4

Type of Crops	Crops	Areas of Production in India/Brazil
Food Crops	_____	_____
Cash Crops	_____	_____
Fruits and Vegetables	_____	_____

**Q.5 Give reasons (Any 2)**

6

- i) In India agriculture has been a long-standing activity.
- ii) The imperial power which ruled Brazil also ruled in India.
- iii) The Northern Plains of India are thickly populated.
- iv) Orographic type of rainfall is prominent in India.

**Q.6 A] Observe image given below and answer following question.**

6

Study the Table and answer the following question.

	October 2013	Septemebr 2013	October 2012
Imports	37.83	34.44	44.24
Exports	27.27	27.68	24.03
Trade Deficit	10.56	6.76	20.21
Crude Imports	15.22	13.20	14.96
Gold Imports	1.37	0.80	6.78

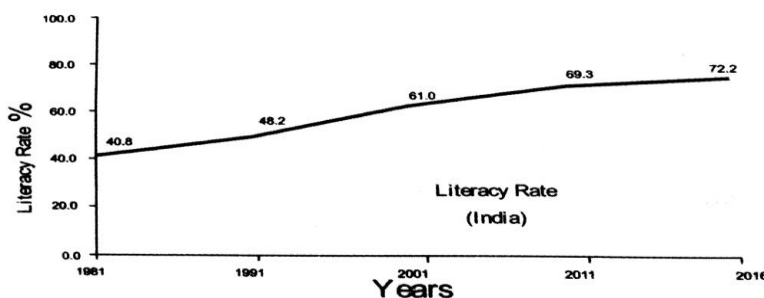
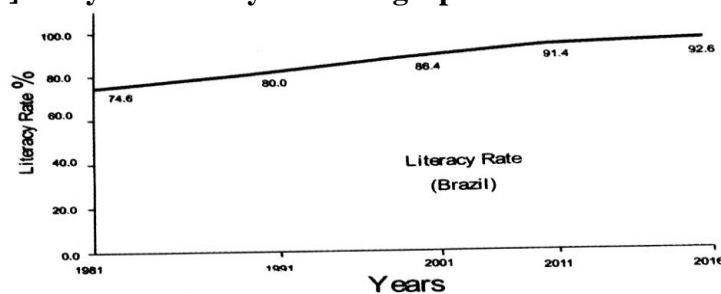
- i) How much import is seen in India in year September 2013?
- ii) Maximum Trade deficit is seen in which year? how much?
- iii) Crude import is maximum in which year?
- iv) In which year exports are more than imports?
- v) Gold imports are less in which year?

1  
2  
1  
1  
1

**OR**

**B] study the literacy rate line graph of India and Brazil and answer the question:(Any 3)**

6



- i) What is the strikingly contrasting point between the literacy rate of India and Brazil?
- ii) What is the pattern of % literate population in India and Brazil?
- iii) In which year India has seen a drastic change in literacy rate? Why?
- iv) Which country is growing at a faster rate? Why do you think so?
- v) Do you think the literacy rate and population growth rate are related to each other? Justify with the facts.

**Q.7 Answer the following in short. (Any 2)**

8

- i) Modern means of communication. Explain with examples
- ii) What precautions are to be taken while selecting the study area for field visit?
- iii) Compare the climates of Brazil and India.
- iv) What are the major water divides of India? Explain giving examples.

\*This question paper is for practice purpose only.